

棠外附小一年级数学每周小练（12）

班级：

姓名：

1、看谁算的又对又快。

$4+6=$

$10-8=$

$7+3=$

$9-5=$

$6+3=$

$10-0=$

$5+5=$

$2+8=$

$10-8=$

$9+1=$

$4+5-3=$

$10-3-5=$

$6+4-3=$

$2+2+4=$

2、夺红旗。



$3 \xrightarrow{+7} \square \xrightarrow{-} \square \xrightarrow{+2} \square \xrightarrow{-} \square$

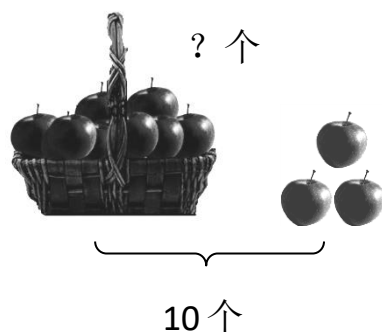


$10 \xrightarrow{-6} \square \xrightarrow{+3} \square \xrightarrow{-} \square \xrightarrow{+4} \square$




3、看图填算式。

(1)




$\square \bigcirc \square = \square (\text{个})$

(2)



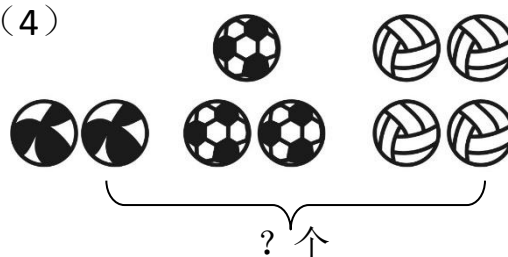
$\square \bigcirc \square \bigcirc \square = \square (\text{只})$

(3)



$\square \bigcirc \square = \square (\text{只})$

(4)



$\square \bigcirc \square \bigcirc \square = \square (\text{个})$