

# 棠外附小第17周易错题练习

班级\_\_\_\_\_ 姓名\_\_\_\_\_ 家长签字\_\_\_\_\_

## 1. 括号里最大能填几？

$6 + ( ) < 10$

$3 + ( ) < 4$

$4 + ( ) < 8$

$( ) + 5 < 9$

$( ) - 4 < 3$

$9 - ( ) > 3$

$3 + ( ) < 6$

$( ) + 7 < 9$

$6 - ( ) > 2$

$5 + ( ) < 10$


$( ) + 3 < 9$

$8 - ( ) > 4$

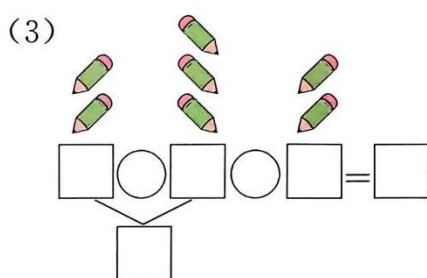
## 2. 看图写算式



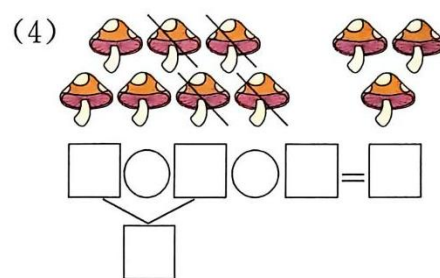
$\square \bigcirc \square = \square$



$\square \bigcirc \square = \square$



$\square \bigcirc \square \bigcirc \square = \square$



$\square \bigcirc \square \bigcirc \square = \square$

## 3. 现在树上有几只鸟？



$\square \bigcirc \square \bigcirc \square = \square \text{ (只)}$

答：树上现在有  $\square$  只鸟。

## 4. 动脑筋，找规律。

