

棠外附小一年级数学第14周易错练习

班级：_____ 姓名：_____ 家长签字：_____

一、计算。

$1 + 9 - 2 =$

$1 + 8 + 2 =$

$7 + 3 - 5 =$

$5 + 5 - 5 =$

$10 - 2 - 8 =$

$2 + 8 - 3 =$

$1 + 9 - 5 =$

$9 - 5 - 4 =$

$6 + 4 - 7 =$

$7 + 3 - 5 =$


$5 + 5 - 4 =$

$4 + 5 - 7 =$


$10 + 0 - 2 =$

$8 + 2 - 8 =$

$8 + 1 - 2 =$




$3 \xrightarrow{+7} \square \xrightarrow{-5} \square \xrightarrow{+2} \square \xrightarrow{-6} \square$




$10 \xrightarrow{-6} \square \xrightarrow{+3} \square \xrightarrow{-2} \square \xrightarrow{+4} \square$




二、看图列式。




$\square \bigcirc \square = \square \text{ (只)}$



$\square \bigcirc \square = \square \text{ (个)}$



$\square \bigcirc \square = \square \text{ (架)}$



$\square \bigcirc \square = \square \text{ (只)}$

三、我是小小数学家。

1、在○里填上“+”或“-”，使算式成立。

$4 \bigcirc 4 = 8$

$8 \bigcirc 6 \bigcirc 5 = 7$

$7 \bigcirc 4 \bigcirc 5 = 8$

$7 \bigcirc 2 = 5$

$9 \bigcirc 5 \bigcirc 4 = 0$

$9 \bigcirc 6 \bigcirc 2 = 5$

2、同学们去公园排队买票，淘气前面站了4个人，后面站了3个人，一共有多少人在排队？（温馨提示：画图可以解决哦！）