

# 棠外附小一年级上册数学易错题练习

班级\_\_\_\_\_ 姓名\_\_\_\_\_ 用时\_\_\_\_\_分钟




1、用自己的方式表示出下面算式的意思，并写出得数。

$1+2=$

$3+1=$

$4-3=$

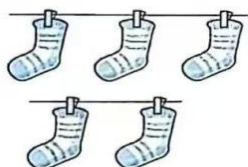
$5-5=$



2、把小兔送回家。(连一连)




3、看图列式计算。




$\square + \square = \square$

$\square - \square = \square$



$\square + \square = \square$



$\square - \square = \square$

动脑筋：4个小朋友玩老鹰捉小鸡，已经捉到了2只，还有几只小鸡没有捉到？

$\square \bigcirc \square = \square$

